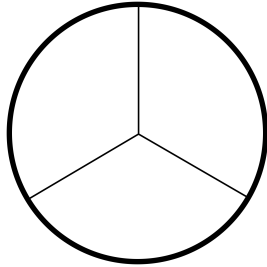


Name \_\_\_\_\_

Everyday Math for 2nd Grade  
Home Link Companion 9.2

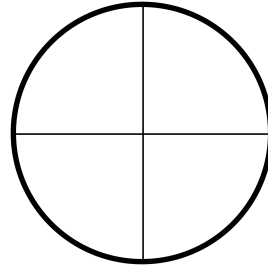
1. shade 2 parts



Write the name for the shaded parts. \_\_\_\_\_

Write the name for the white parts. \_\_\_\_\_

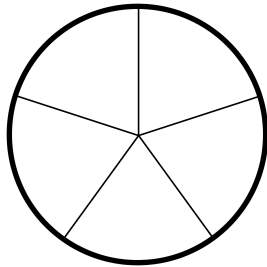
2. shade 1 part



Write the name for the shaded parts. \_\_\_\_\_

Write the name for the white parts. \_\_\_\_\_

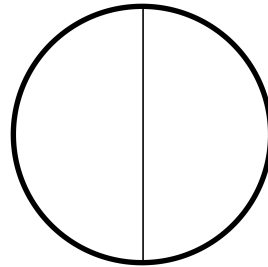
3. shade 4 parts



Write the name for the shaded parts. \_\_\_\_\_

Write the name for the white parts. \_\_\_\_\_


4. shade 2 parts



Write the name for the shaded parts. \_\_\_\_\_

Write the name for the white parts. \_\_\_\_\_

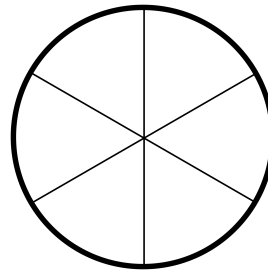
1. shade 1 part



Write the name for the shaded parts. \_\_\_\_\_

Write the name for the white parts. \_\_\_\_\_

1. shade 3 parts



Write the name for the shaded parts. \_\_\_\_\_

Write the name for the white parts. \_\_\_\_\_